

Quick Time Recap!



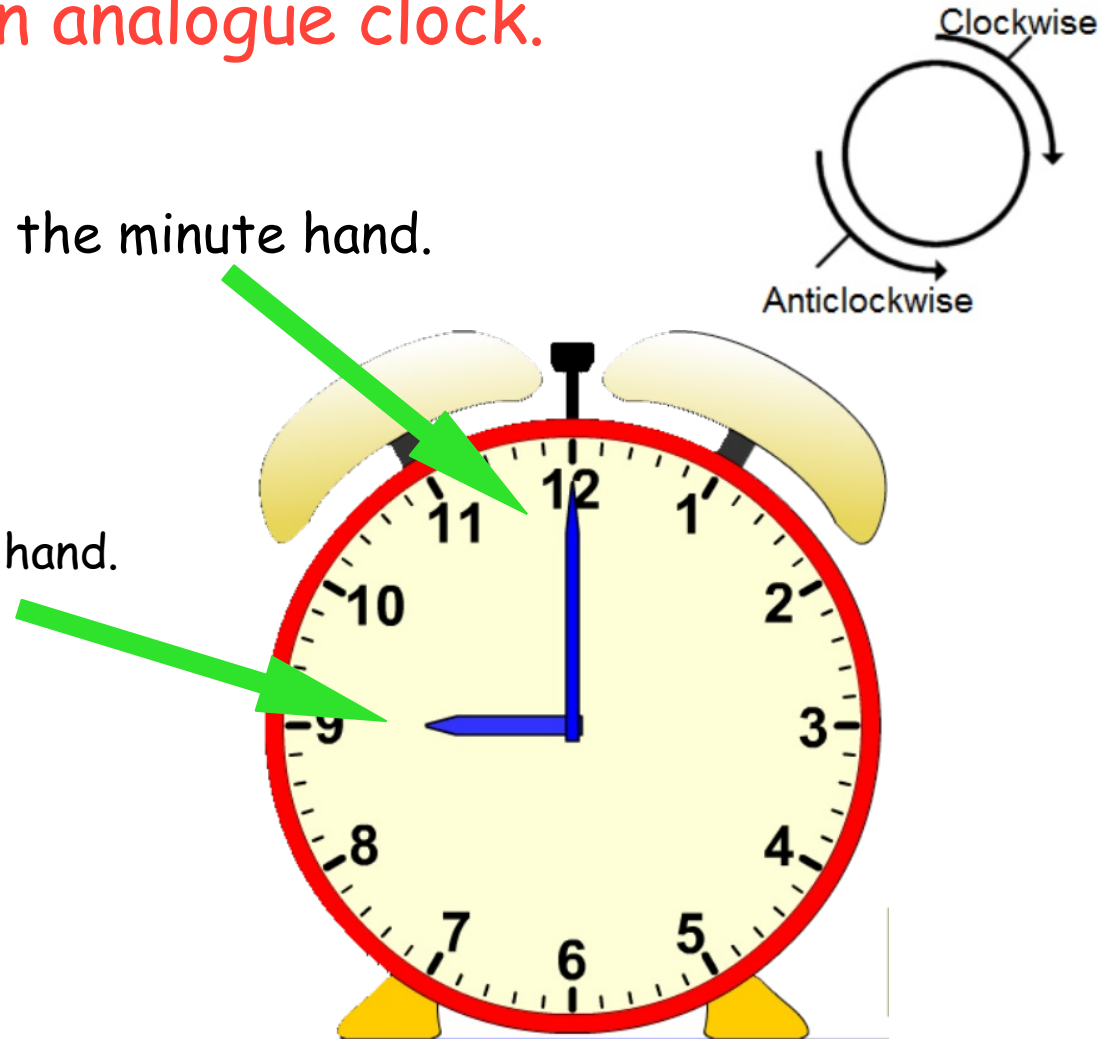
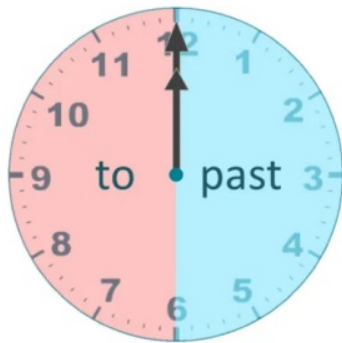
1. How many **seconds** are there **in a minute**? _____
2. How many **minutes** are there **in an hour**? _____
3. How many **minutes** are there **in a quarter of an hour**?

4. How many **minutes** are there **in half an hour**? _____

WALT read the time on an analogue clock.

The longest hand is called the minute hand.

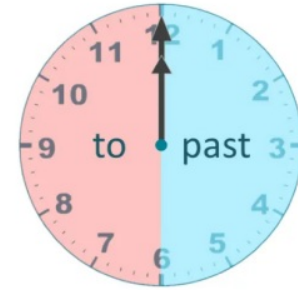
The shorter hand is called the hour hand.



WALT read the time on an analogue clock.

When the minute hand points to the 12, it is o'clock (the start of a new hour)

o clock



quarter to



When the minute hand points to the 9, it is quarter to the hour.

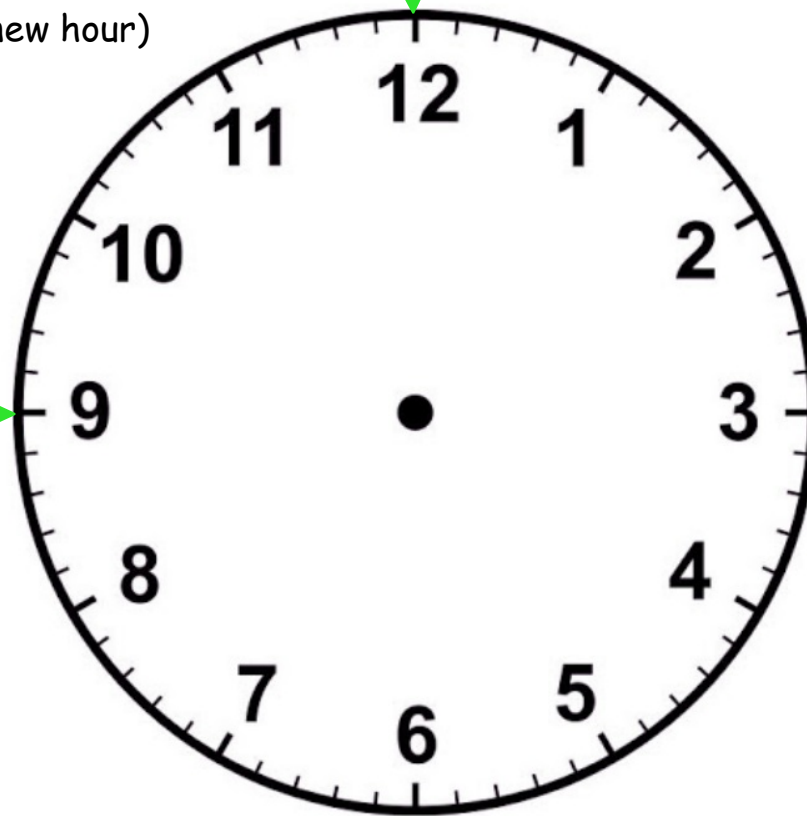
When the minute hand points to the 3, it is quarter past the hour.

quarter past



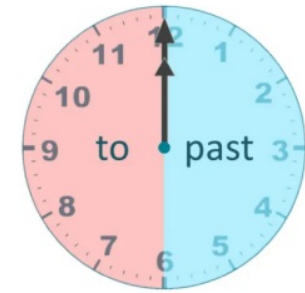
When the minute hand points to the 6, it is half past the hour.

half past

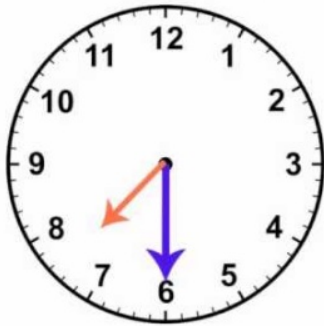


WALT read the time on an analogue clock.

Read the time that is shown on these clocks.



5.



6.



7.

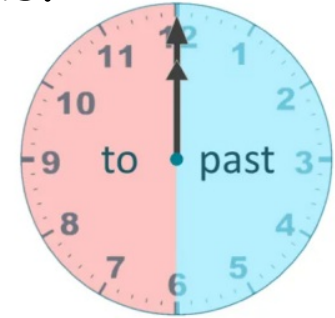


8.



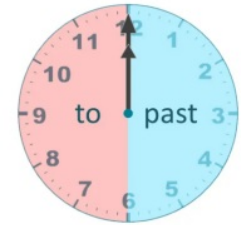
WALT read the time on an analogue clock in 5 minute intervals.

The numbers on the clock face go round in 5 minute intervals.
Each increment (line) represents 1 minute.



WALT read the time on an analogue clock in 5 minute intervals.


Read the time that is shown on these clocks.



9.




10



11.



12.



13. Paul went for a walk at 3 o'clock. He returned home one hour later. What time did Paul get home?