

Monday 8th June



Under the Sea!



abcde **Phonics:**

Listen to the Epic Phonics alphabet song. Whilst you listen can you write the letters?

<https://www.youtube.com/watch?v=5PmB3STjNdQ>

Now play Buried Treasure on phonics play: <https://new.phonicsplay.co.uk/resources/phase/2/buried-treasure> Try Phase 2 first and then try Phase 3

sets 1 - 7, can you add in the vowel digraphs that you know?

If you haven't used Phonicsplay.co.uk go to home page and follow the instructions to log on.

Have a go at being a word detective - the activity is in a separate document.



Handwriting:

Can you write the letters curly caterpillar letters - c, a, d, o

Select the letters and watch them being written and then have a go. You could use a pencil or a colouring pencil, you could use a paintbrush and water outside.

<https://www.doorwayonline.org.uk/literacy/letterformation/>

1 2 3 **Maths:**

Practise counting to 20. If you need help do it with an adult or an older brother or sister. If you can count to 20 keep counting! How far can you get?

Use these songs to help you:

Count to 20: <https://www.youtube.com/watch?v=0VLxWIHRD4E>

Count beyond 20: <https://www.youtube.com/watch?v=QbHobZOKY5w> Can you do the exercises and count at the same time?

See the next page for the maths activity.



Curriculum: Have a look at the Sea Learning Challenges. Try the one about the magic shell.



Story: Commotion in the Ocean <https://www.youtube.com/watch?v=9pRhgZ8Jffs>





Watch the lesson from Oak Academy:

<https://www.thenational.academy/reception/maths/understanding-the-concept-of-equal-groups-reception-wk2-1#slide-2>

Click the start lesson button and then click the play button.

When we have shared a group between two we have shared in to halves.

Find some objects, you could use lego bricks or counters or anything else that you can think of to share in half.



You could use bowls or boxes.

Can you say half of _____ is _____? For example half of 4 is 2.

Try these numbers: 6, 10, 14, 22. If you can do those maybe you can choose a bigger number with an adult.

Tuesday 9th June



Under the Sea!



abcde Phonics:

Listen to Usher's ABC song. Whilst you listen can you write the letters?

<https://www.youtube.com/watch?v=SWvBAQf7v8g>

Now play Dragon's Den on phonics play: <https://new.phonicsplay.co.uk/resources/phase/2/dragons-den> Try Phase 2 first and then try Phase 3 sets 1 - 7, can you add in the vowel digraphs that you know?

If you haven't used Phonicsplay.co.uk go to home page and follow the instructions to log on.

Now try the separate Tuesday phonics activity.



Handwriting:

Can you write these words in your best handwriting? **fish, rock, shell, shark**

If you need to select the letters and watch them being written and then have a go. You could use a pencil or a colouring pen, you could use a paintbrush and water outside.

<https://www.doorwayonline.org.uk/literacy/letterformation/>



Maths:

Count from 0 to 20 and back again. Use the song to help you: https://www.youtube.com/watch?v=srPkt4k_O8 Now try counting back from different numbers to 0 - use your numberline to help you.



Curriculum: We are going to learn about sharks. Please see the separate writing activity.



Information (non-fiction) about sea creatures: https://www.youtube.com/watch?v=j_DxrpMKCOg



Tuesday maths - halving




<https://www.thenational.academy/reception/maths/sharing-objects-into-equal-groups-reception-wk2-2#slide-2>

Now look at the next pages. Can you help the pirates share the coins in half? You could use 1ps or counters or lego bricks or anything else you can think of!

The pirates have found 4 coins.
They need to take half each.

Do the pirates have half each?



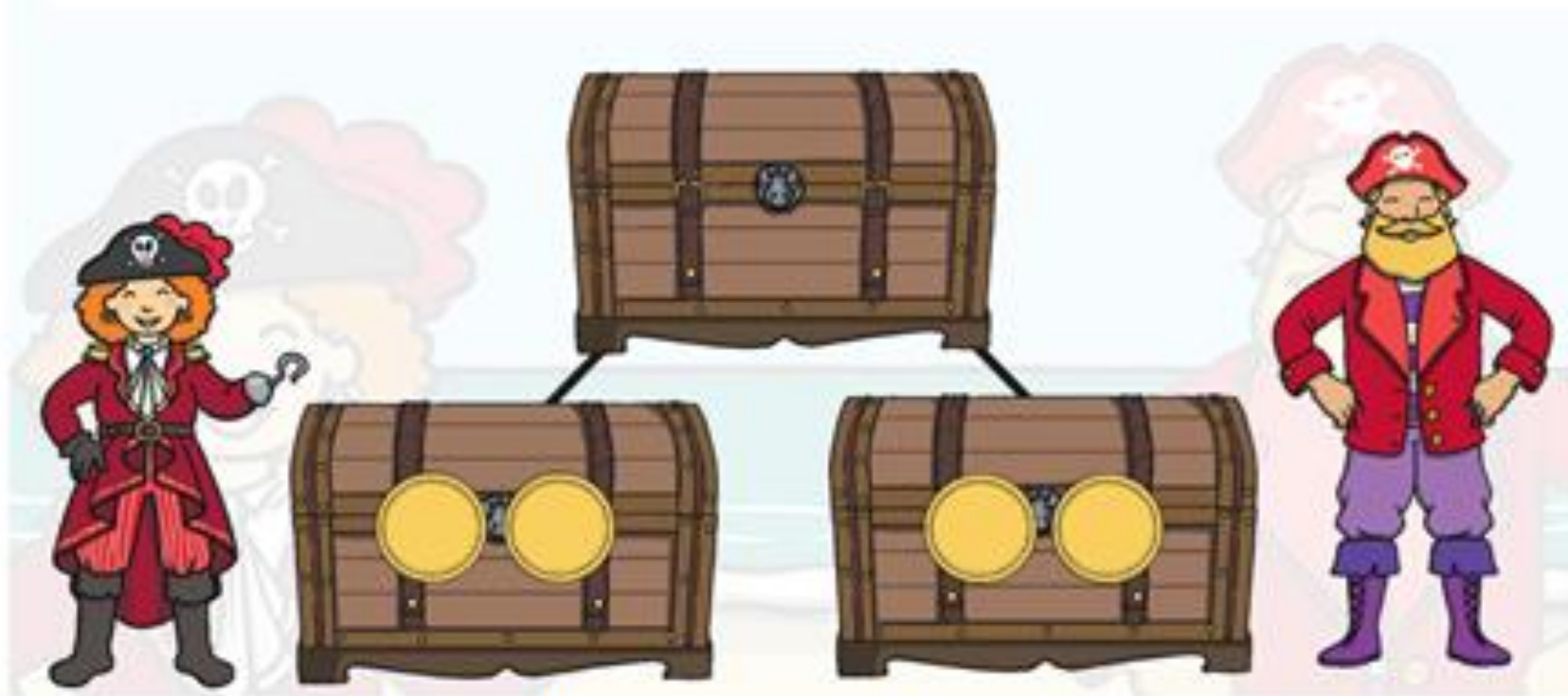
How many is half of 4?



answer

The pirates have found 4 coins.
They need to take half each.

Do the pirates have half each?

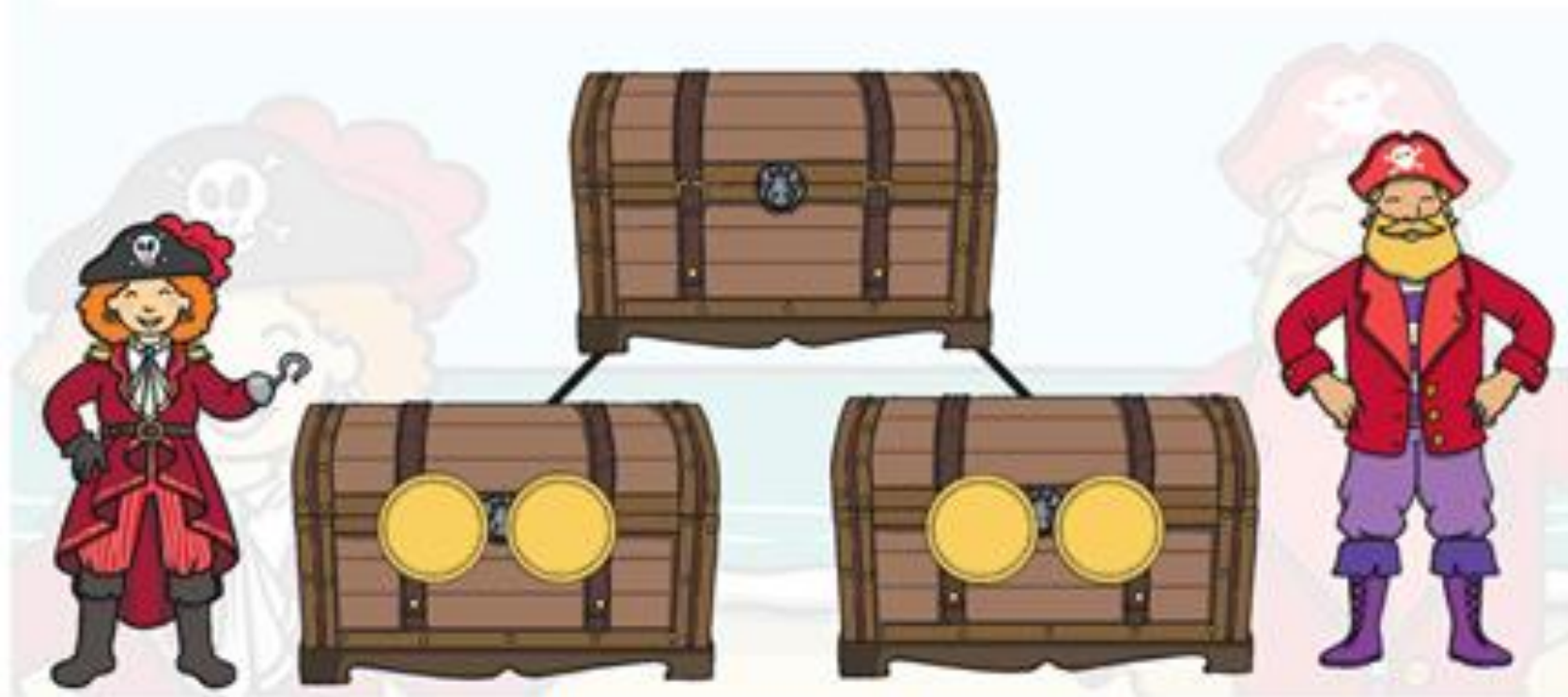


The pirates have half each because they each have the same number of coins.

Half of 4 is 2.


The pirates have found 4 coins.
They need to take half each.

Do the pirates have half each?



The pirates have half each because they each have the same number of coins.

Half of 4 is 2.



Choose another number to share in half.

You could try **8, 12, 16, 20, 24 or 28.**

Try to give yourself a challenge to count a number that is a bit bigger than you would normally use!